



INDIAN SCHOOL AL WADI AL KABIR

DEPARTMENT OF MATHEMATICS (2024-2025)

TOPIC: NUMBERS

RECALL WORKSHEET


RESOURCE PERSON: Ms. Veda Vijay

NAME: _____ CLASS: III SEC: _____ DATE: _____

Read the instructions and do as directed.

I. The numbers given below in the box are the ages of these animals. Match them correctly by using the clue given by the animals.

1. My age has '0' in ones place and '2' in tens place.



a.250

b.190


c.120

d.111


3. My age has '2' in the hundreds place.



2. My age is more than 180 but less than 200.



4. I am the youngest animal here.



1. _____ 2. _____ 3. _____ 4. _____

5. Write the number name for the age of tortoise.

6. Write the Expanded Form for the age of macaw.



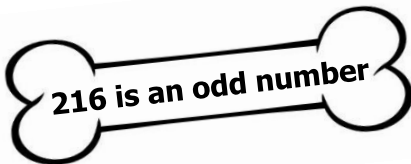

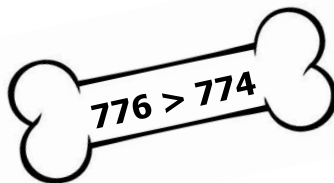
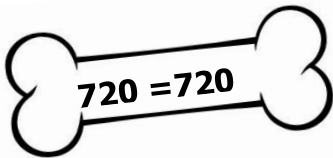

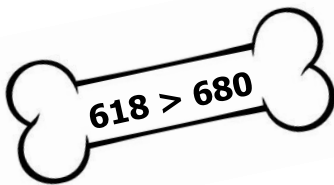
= _____ + _____ + _____

7. Arrange the ages of the animals given above in ascending order.

II. Write the Place and Place Value of the digit underlined in the number.

| Number | Place of the underlined digit | Place Value |
|--------------|-------------------------------|-------------|
| 3 4 <u>3</u> | | |
| 1 <u>0</u> 6 | | |
| <u>4</u> 1 8 | | |
| 2 7 <u>0</u> | | |

III. Pat is feeling hungry but some of the bones given below are not real. The real bones are given with the correct answer. Colour those bones and help the dog.



IV. Observe the pattern and fill in the blanks.

a.

b.